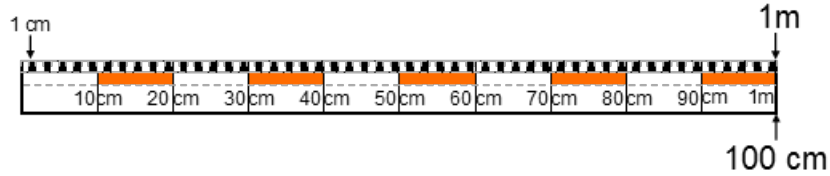


## Was ergeben die Längenmasse in anderen Einheiten?

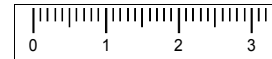


1. Wandle m in cm oder cm in m um:

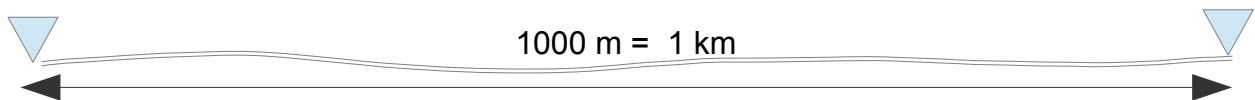


1 m = 100 cm	1 m 50 cm = _____ cm
6 m = _____ cm	3 m 70 cm = _____ cm
9 m = _____ cm	_____ m _____ cm = 560 cm
_____ m = 1400 cm	_____ m _____ cm = 770 cm

2. Wandle cm in mm oder mm in cm um:




1 cm = 10 mm	1 cm 5 mm = _____ mm
6 cm = _____ mm	4 cm 1 mm = _____ mm
11 cm = _____ mm	_____ cm _____ mm = 68 mm
16 cm = _____ mm	_____ cm _____ mm = 87 mm

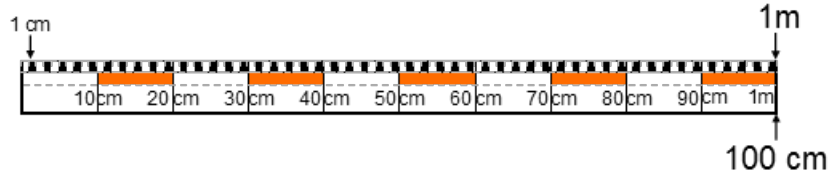


3. Wandle km in m oder m in km um:

1 km = 1000 m	2 km 900 m = _____ m
3 km = _____ m	4 km 700 m = _____ m
5 km = _____ m	_____ km _____ m = 7400 m
_____ km = 10000 m	_____ km _____ m = 9900 m



# Was ergeben die Längenmasse in anderen Einheiten? Lösungen

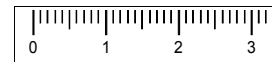


1. Wandle m in cm oder cm in m um:

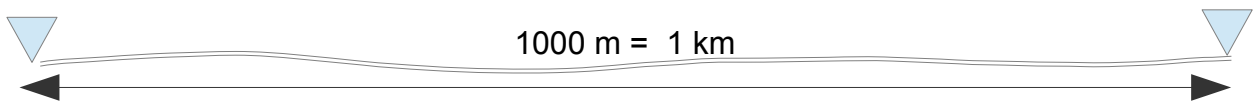


1 m = 100 cm	1 m 50 cm = <u>150</u> cm
6 m = <u>600</u> cm	3 m 70 cm = <u>370</u> cm
9 m = <u>900</u> cm	<u>5</u> m <u>60</u> cm = 560 cm
<u>14</u> m = 1400 cm	<u>7</u> m <u>70</u> cm = 770 cm

2. Wandle cm in mm oder mm in cm um:



1 cm = 10 mm	1 cm 5 mm = <u>15</u> mm
6 cm = <u>60</u> mm	4 cm 1 mm = <u>41</u> mm
11 cm = <u>110</u> mm	<u>6</u> cm <u>8</u> mm = 68 mm
16 cm = <u>160</u> mm	<u>8</u> cm <u>7</u> mm = 87 mm



3. Wandle km in m oder m in km um:

1 km = 1000 m	2 km 900 m = <u>2900</u> m
3 km = <u>3000</u> m	4 km 700 m = <u>4700</u> m
5 km = <u>5000</u> m	<u>7</u> km <u>400</u> m = 7400 m
<u>10</u> km = 10000 m	<u>9</u> km <u>900</u> m = 9900 m