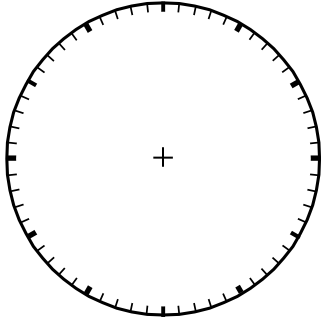




a) Kreismodell




b) Rechteckmodell



c) auf dem Hunderterfeld

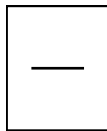


d) Stabmodell

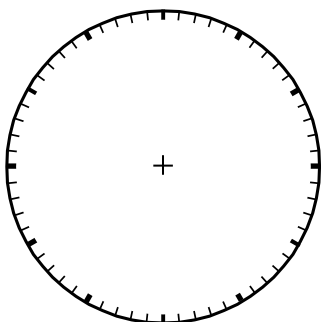


- von 100 sind .....

Prozent: - = .....%




a) Kreismodell




b) Rechteckmodell



c) auf dem Hunderterfeld



d) Stabmodell



- von 100 sind .....

Prozent: - = .....%